



SYMMETRY


A: I can identify and draw lines of symmetry in pictures and objects




B: I can create symmetrical patterns



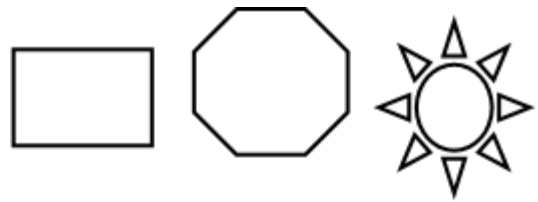
C: I can recognise rotational symmetry and state the order of rotational symmetry



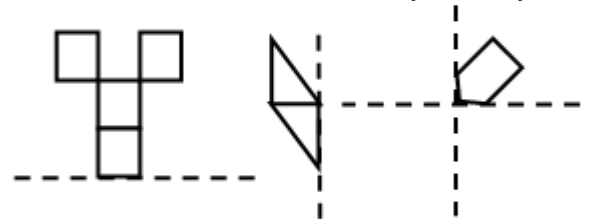
D: I can complete diagrams given the order of rotational symmetry



Draw any lines of symmetry in these diagrams



Copy and complete these patterns using the dotted line as an axis of symmetry



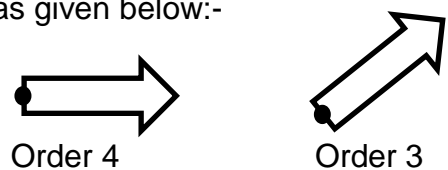
State the order of symmetry of these patterns?



State the order of symmetry of the following shapes:-

Square
Rectangle
Equilateral triangle
Rhombus
Parallelogram

Copy and add more arrows so that each diagram has rotational symmetry around the point as given below:-



Shade in two more squares so that this diagram has order of rotational symmetry 4.

